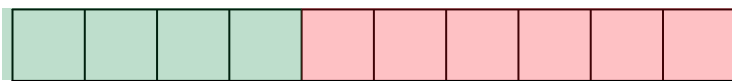



Help the Viking Girl


Make 10




$$\textcircled{4} + \textcircled{6} = 10$$




$$\textcirc{\quad} + \textcirc{\quad} = 10$$




$$\textcirc{\quad} + \textcirc{\quad} = 10$$




$$\textcirc{\quad} + \textcirc{\quad} = 10$$




$$\textcirc{\quad} + \textcirc{\quad} = 10$$




$$\textcirc{\quad} + \textcirc{\quad} = 10$$



$$\textcirc{\quad} + \textcirc{\quad} = 10$$



$$\textcirc{\quad} + \textcirc{\quad} = 10$$



$$\textcirc{\quad} + \textcirc{\quad} = 10$$